


Date: _____




L.O - I can make equal groups (Recap)

HOOK: Spot the mistake!

Alex says, "There are 10 equal groups with 2 in each group. There are ten 2s."



1) Circle the correct label for these pictures.



equal groups
unequal groups

2) Complete the sentences.




There are equal groups of




There are equal groups of

3) Kim is drawing 5 equal groups of 6. Finish her drawing.



4) Ron and Mo have some cherries.



Who has made equal groups and how do you know?

5) In your books, draw objects you can see in your classroom to make these groups:

a) 5 equal groups of 3

c) 3 equal groups of 5

b) 4 equal groups of 6

d) 2 equal groups of 10.

Can you write how many each set has altogether?


Challenge 1:

Dora and Rosie are making hay bundles.


Who has made equal groups?



Dora



Rosie



Explain how you know.

Challenge 2:

Use concrete materials or pictures to complete the questions.

Alex has 4 equal groups.

Show me what Alex's groups could look like.

Whitney has 3 unequal groups.

Show me what Whitney's groups could look like.