

Date: _____

L.O - I can add equal groups (Recap).

HOOK: True or False?

$$5 + 5 = 2 + 2 + 2 + 2 + 2$$

Draw an image or use cubes to help you explain your answer.

1) Complete the sentences.



There are apples in each bag.

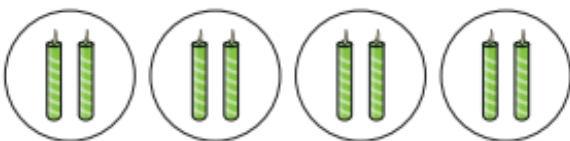
There are bags.

There are equal groups of

There are apples altogether.

$$\square + \square + \square + \square = \square$$

4) How many candles are there?



$$\square + \square + \square + \square = \square$$

There are candles.

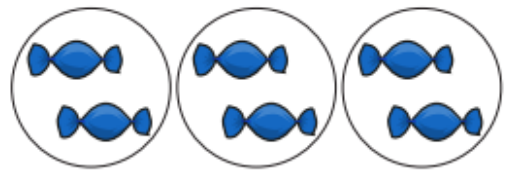
5) Complete the numbers sentences.

a) $2 + 2 + 2 + 2 = \square$

b) $5 + 5 + 5 + 5 + 5 = \square$

6) There are 7 equal groups of 5 counters, How many counters are there altogether?


2) How many sweets are there?



$$\square + \square + \square = \square$$

There are sweets.

3) How many marbles are there?



$$\square + \square + \square = \square$$

There are marbles.

Challenge:

1)

Eva and Whitney are making equal groups of bread rolls.



Eva

We need one more group to make 40

We need 10 more rolls to make 40



Whitney

Who do you agree with? Explain why.

2)

Rosie and Eva have equal groups of either 2, 5 or 10



Each of their totals is less than 40

Rosie has 5 equal groups.
Eva has 3 equal groups.

Eva's total is more than Rosie's total.

What could they be counting in?

Use equipment to help you.